



nimdee

FUN FREE
WORKSHEETS

for Primary
1-3



Give your child a head start

Did you know that spending only 5 minutes a day learning something new can have a significant impact on children?

“To become really good at anything, you have to practice and repeat, practice and repeat, until the technique becomes intuitive.” Paulo Coelho

Nimdee worksheets are designed to support learning and mastery in Maths, English, Science and Financial Literacy for children in Nursery to Junior Secondary school.

We believe learning should not be boring. Here are **10 FREE fun printable worksheets** to make learning fun and help children stay motivated during the short break by practicing towards subject mastery.

visit www.nimdee.com

Name:

'a' or 'an'

Look at each word and decide which article it requires – 'a' or 'an'.

Score: ___/8

a gift



an umbrella



ant



banana



pineapple



orange



chair



bird



elephant



eye



visit www.nimdee.com

Name: _____

Finding Nouns

Jamal wants you to circle all nouns and pronouns in each sentence.

Score: /20

1. Hockey is my favorite sport.
2. My grandmother plays ludo.
3. Your dad prefers soccer.
4. When you have a pool you can swim.
5. My friends like basketball.
6. Your sister enjoys tennis a lot.
7. To dance, you can wear your boots.
8. We use a boat to fish in the lake.
9. There are eleven players in a football team.
10. Hit the volleyball over the net.



visit www.nimdee.com

Name: _____

WordFun
The amazing universe of words

Similes

Join Jamal to complete each simile sentence with words from the box.

Score: ___/7

Angel Baby Dogs Snow
Lion Whistle Cheetah

1. The young girl is as brave as a _____.
2. The siblings fought like cats and _____.
3. Omarr runs fast like a _____.
4. My aunt sings like an _____.
5. My house is as clean as a _____.
6. I slept like a _____ last night.
7. Her wedding dress is as white as _____.



Name:

Telling Time

Look at the clocks and write down the time.

Score: /5



12 o' clock



o' clock



o' clock



o' clock



o' clock



o' clock

Name: _____



Multiply by 3

Find the products.

Score: /16

$$\begin{array}{r} 5 \\ \times 3 \\ \hline \end{array}$$

$$\begin{array}{r} 6 \\ \times 3 \\ \hline \end{array}$$

$$\begin{array}{r} 3 \\ \times 8 \\ \hline \end{array}$$

$$\begin{array}{r} 7 \\ \times 3 \\ \hline \end{array}$$

$$\begin{array}{r} 10 \\ \times 3 \\ \hline \end{array}$$

$$\begin{array}{r} 9 \\ \times 3 \\ \hline \end{array}$$

Fill in the multiplication chart

x	1	2	3	4	5	6	7	8	9
3									

Name: _____



Make Change

Figure out how much change each customer will get back.

Score: /8

You buy



For ₦105

You gave ₦150

Your change is:

You buy



For ₦150

You gave ₦250

Your change is:

You buy



For ₦250

You gave ₦450

Your change is:

You buy



For ₦195

You gave ₦400

Your change is:

You buy



For ₦70

You gave ₦100

Your change is:

You buy



For ₦55

You gave ₦70

Your change is:

You buy



For ₦405

You gave ₦500

Your change is:

You buy



For ₦310

You gave ₦355

Your change is:

Name: _____



Expressing Numbers

Join Timmy to solve the following questions using calculator methods.

Score: / 8

1 There are 19 roses and 46 sunflowers in a flower bed.

a) What fraction of the flowers are roses?

b) What percentage of the flowers are roses?

c) What fraction of the flowers are sunflowers?

d) What percentage of the flowers are sunflowers?

2 Express the first quantity as a fraction and a percentage of the second quantity.

Give all percentages to the nearest whole.

a) 45 ml, 0.5 litres

c) 43 seconds, 2 minutes

b) 240 m, 3.6 km

d) 7 weeks, 1 leap year

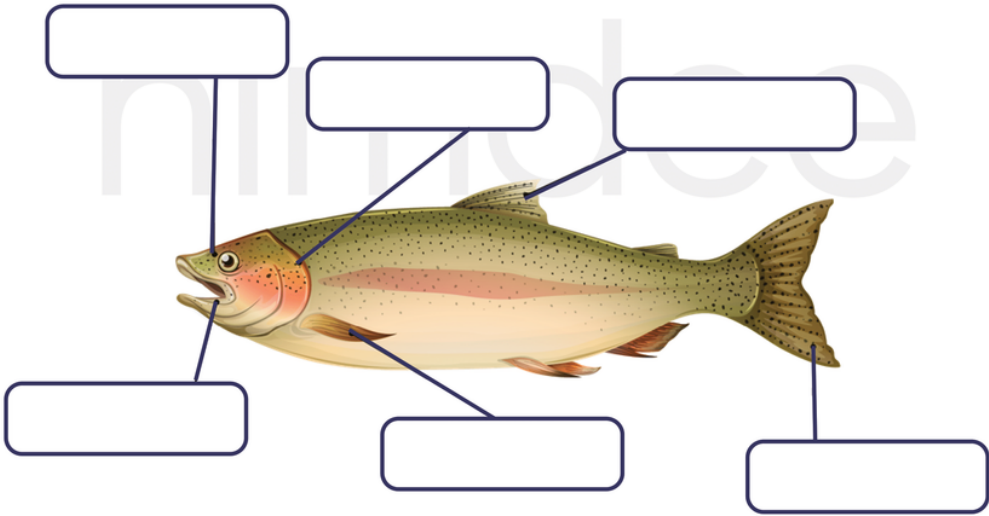
visit www.nimdee.com

Name:

Parts of a fish

Label the parts of the fish below.

Score: /6



Name: _____

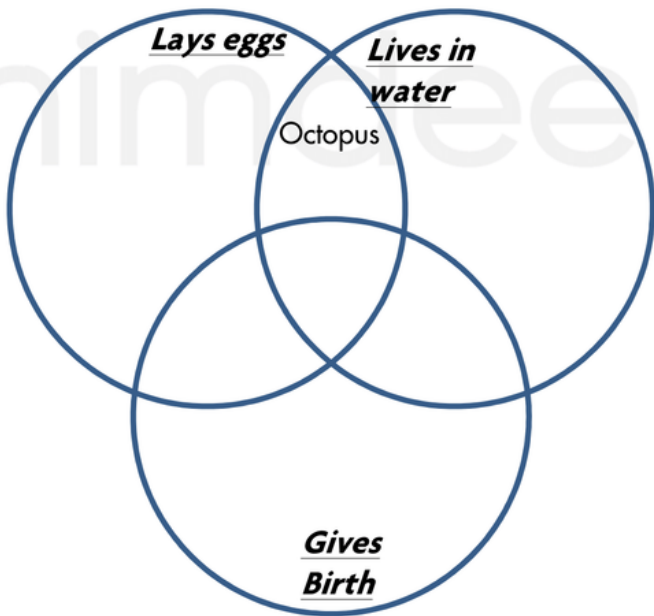
Grouping Living Things

Place each living thing in the area of the circles they belong to. Lola did one for you.

Score: /14



Duck	Lion	Peahen
Mosquito	Dragonfly	Chameleon
Blue Whale	Polar Bear	Elephant
Snake	Dolphin	Salmon
Brown crab	Octopus	Shark



Name:

Parts of the body

Label the parts of the body.

Score: /11



visit www.nimdee.com

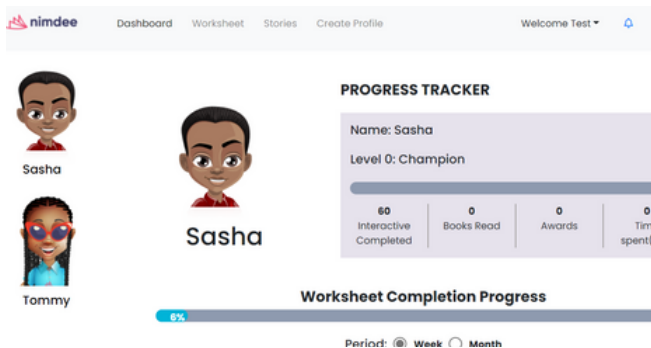
We've got something for everyone



Over 1000 fun worksheets for children in Nur, pry & JSS



Stories in English, French and Arabic



Parents/teacher dashboard to monitor child's progress

Enjoy unlimited **FREE** worksheets from now till December. Visit www.nimdee.com to download more worksheets.

Name:

ANSWER

WordFun
The amazing universe of words

'a' or 'an'

Look at each word and decide which article it requires – 'a' or 'an'.

Score: ___/8

a gift



an umbrella



an ant



a banana



a pineapple



an orange



a chair



a bird



an elephant



an eye



visit www.nimdee.com

Name: _____

Finding Nouns

Jamal wants you to circle all nouns and pronouns in each sentence.

Score: /20

1. Hockey is my favorite sport.
2. My grandmother plays ludo.
3. Your dad prefers soccer.
4. When you have a pool you can swim.
5. My friends like basketball.
6. Your sister enjoys tennis a lot.
7. To dance, you can wear your boots.
8. We use a boat to fish in the lake.
9. There are eleven players in a football team.
10. Hit the volleyball over the net.



Name: _____

WordFun
The amazing universe of words

Similes-Answers

Join Jamal to complete each simile sentence with words from the box.

Score: ___/7

Angel Baby Dogs Snow
Lion Whistle Cheetah

1. The young girl is as brave as a lion.
2. The siblings fought like cats and dogs.
3. Omarr runs fast like a cheetah.
4. My aunt sings like an angel.
5. My house is as clean as a whistle.
6. I slept like a baby last night.
7. Her wedding dress is as white as snow.



Name:

ANSWER

Telling Time

Look at the clocks and write down the time.

Score: ___/5



12 o' clock



6 o' clock



3 o' clock



10 o' clock



9 o' clock



1 o' clock

Name: _____



Multiply by 3

Find the products.

Score: /16

$$\begin{array}{r} 5 \\ \times 3 \\ \hline 15 \end{array}$$

$$\begin{array}{r} 6 \\ \times 3 \\ \hline 18 \end{array}$$

$$\begin{array}{r} 3 \\ \times 8 \\ \hline 24 \end{array}$$

$$\begin{array}{r} 7 \\ \times 3 \\ \hline 21 \end{array}$$

$$\begin{array}{r} 10 \\ \times 3 \\ \hline 30 \end{array}$$

$$\begin{array}{r} 9 \\ \times 3 \\ \hline 27 \end{array}$$

Fill in the multiplication chart

x	1	2	3	4	5	6	7	8	9
3	3	6	9	12	15	18	21	24	27

Name: _____



Make Change

Figure out how much change each customer will get back.

Score: /8

You buy



For ₦105

You gave ₦150

Your change is:

₦45

You buy



For ₦150

You gave ₦250

Your change is:

₦100

You buy



For ₦250

You gave ₦450

Your change is:

₦150

You buy



For ₦195

You gave ₦400

Your change is:

₦205

You buy



For ₦70

You gave ₦100

Your change is:

₦30

You buy



For ₦55

You gave ₦70

Your change is:

₦15

You buy



For ₦405

You gave ₦500

Your change is:

₦95

You buy



For ₦310

You gave ₦355

Your change is:

₦45

Name: _____



Expressing Numbers

Join Timmy to solve the following questions using calculator methods.

Score: / 8

1 There are 19 roses and 46 sunflowers in a flower bed.

a) What fraction of the flowers are roses?

$\frac{19}{65}$

b) What percentage of the flowers are roses?

30%

c) What fraction of the flowers are sunflowers?

$\frac{45}{65}$

d) What percentage of the flowers are sunflowers?

70%

2 Express the first quantity as a fraction and a percentage of the second quantity.

Give all percentages to the nearest whole.

a) 45 ml, 0.5 litres

$\frac{45}{500}$ 36%

c) 43 seconds, 2 minutes

$\frac{43}{120}$ 36%

b) 240 m, 3.6 km

$\frac{240}{3600}$ 7%

d) 7 weeks, 1 leap year

$\frac{49}{366}$ 13%

visit www.nimdee.com

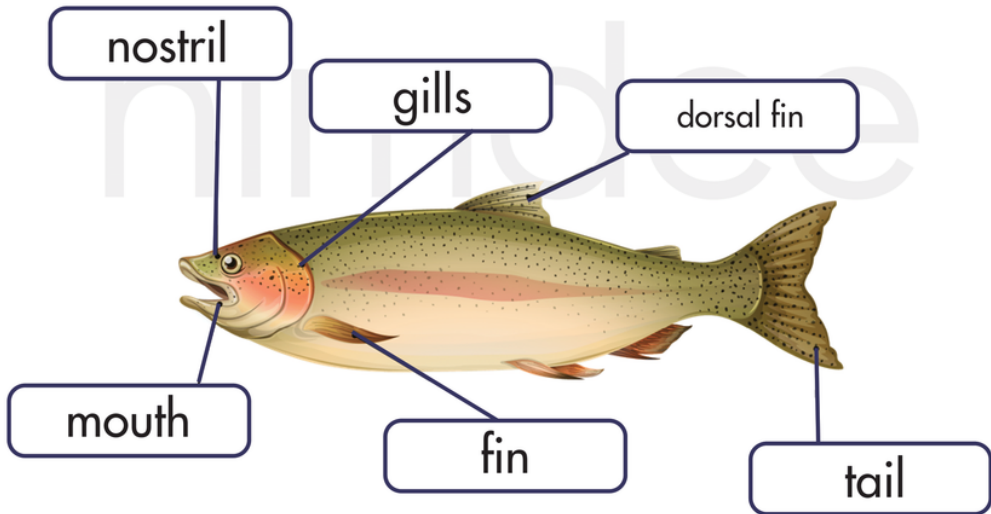
Name:

ANSWER

Parts of a fish

Label the parts of the fish below.

Score: ___/6



Name: _____


Grouping Living Things-Answers

Place each living thing in the area of the circles they belong to. Lola did one for you.

Score: /14



Duck	Lion	Peahen
Mosquito	Dragonfly	Chameleon
Blue Whale	Polar Bear	Elephant
Snake	Dolphin	Salmon
Brown crab	Octopus	Shark



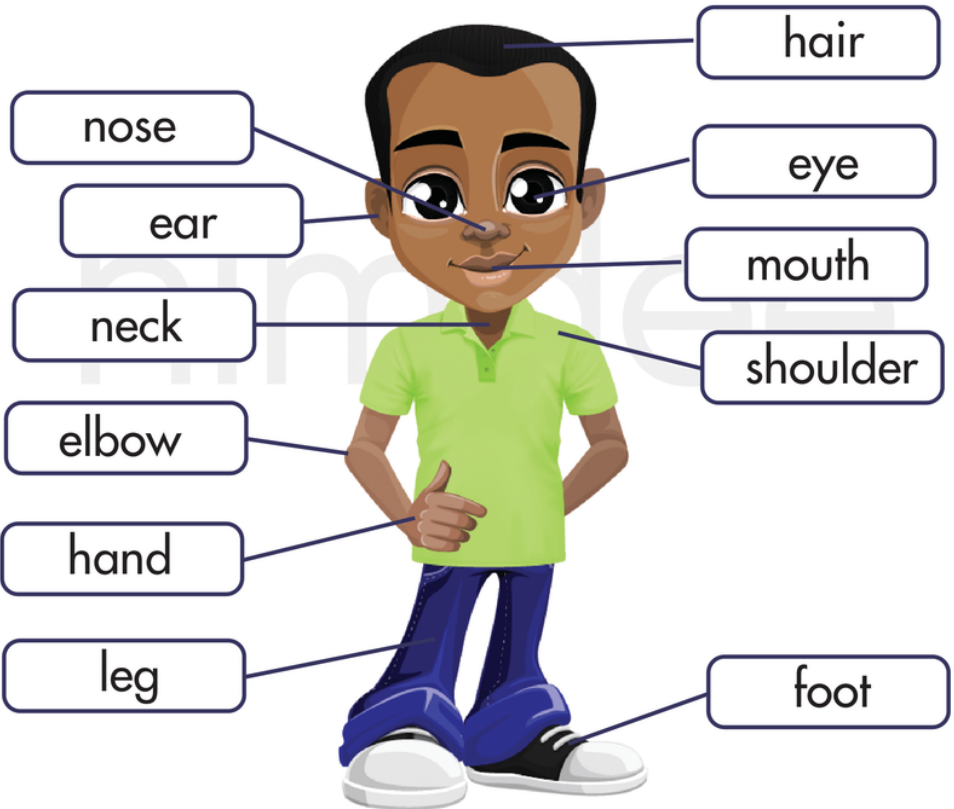
Name:

ANSWER

Parts of the body

Label the parts of the body.

Score: ___/11



visit www.nimdee.com